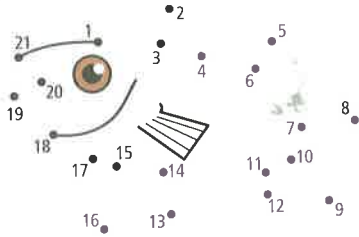


MONDAY

1. Join the dots.



2. Who has more pencils?



3. How many  in total?

4. Take 1  away from Jack and give it to Dan.

Dan now has _____ pencils.

5. $5 + 1 =$ _____

6. $4 - 1 =$ _____

7.




The heavier box is _____.

8.



$2 + 2 + 1 =$ _____

9. Colour the month.



10. Order these numbers from the lowest to the highest.


33 44 80 38

YOUR SCORE



TUESDAY

1. Tick the widest spaceship.



2. About how many of your hands will cover this page?

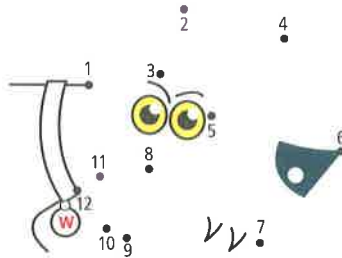
3. 1, 2, 3, _____, 5, 6,

8, _____, 10

4. 10, 9, 8, _____, 6, _____,

4, _____, 2, _____

5.



6. Order these numbers from lowest to highest.

21 18 12 16 5

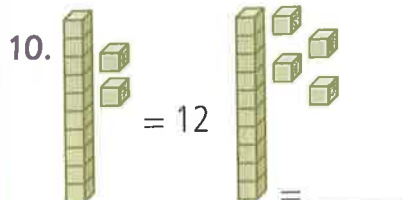
7. 8 is before after 7.

8. $7 + 1 =$ _____

9.



How many? _____



YOUR SCORE



WEDNESDAY

1.



How many? _____

2. How many?



Houses demolished by big bad wolf in January

		
		
Oinky Pig	Snorty Pig	Curly Pig

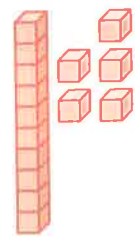
3. How many houses did Big Bad Wolfie blow down?

4. Who had the brick house?

5. $4 + 1 =$ _____

6. $5 - 1 =$ _____

7.



= _____

8. Colour the left arrow.



9. Write seven as a numeral. _____

10. Fill in the missing numbers.

10	11	12
20	21	
	31	32

YOUR SCORE



YOUR SCORE



- 8. How many ?
- 9. How many ?
- 10. How many and altogether?

7. Take 3 fish away. How many are left?



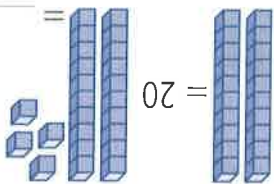
6. Take 4 fish away. How many are left?

	121	122
110	111	
100	101	102

5. Fill in the missing numbers.

87 31 44 80 28

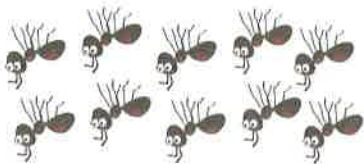
4. Order these numbers from low to high.



- 1. $8 + 1 =$
- 2. $9 - 1 =$
- 3. $=$

THURSDAY

YOUR SCORE



Count the ants. Take away 3 ants. How many are left?

Thursday



Numbers 3 and 5 were missing from a pack of cards numbered 1 to 10. How many cards are there?

Wednesday



20c? What coin is needed to make

Tuesday



Tim has _____ more pencils than Mia.

Monday

YOUR SCORE

12 How many houses were built in 3 months?

11 How many houses were built in the first 2 months?

Brick houses built by Curly Pig		
January	February	March

10 It is currently: morning afternoon evening



9 The lighter load is _____

8 Write nine. _____


7 Is 10 before or after 9?

6 $10 - 1 =$ _____

5 $9 + 1 =$ _____

4 2, 4, 6, _____, 12

3 37, _____, 39, _____, 41



2 $4 + 2 + 2 =$ _____



1 _____

PROBLEM-SOLVING

FRIDAY REVIEW

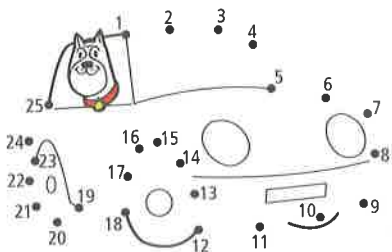


MONDAY



2. Write *fourteen* as a numeral. _____

3. Join the dots.



4. If today is Monday, what day was yesterday?

5. $10 + 1 =$ _____


6. How many eyes does the eye monster have?



7. Fill in the missing numbers.

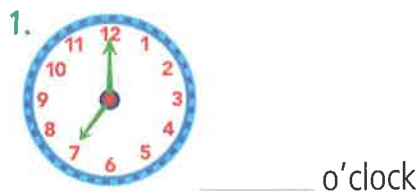
18	19	
28		30
	39	40

8. $3 +$ _____ $= 10$



10. Take 1 dot away. _____

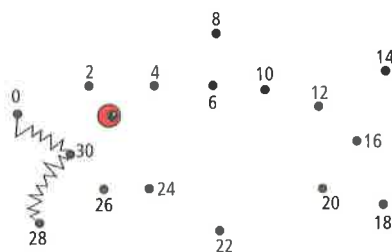
TUESDAY



2. $1 +$ _____ $= 10$

3. Write *eleven* as a numeral.

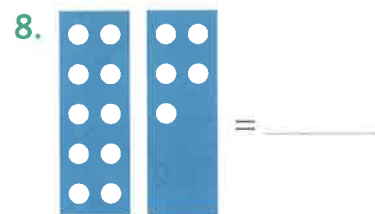
4. Join the dots.




5. $10 + 2 =$ _____

6. About how many of your hands will cover the area of your desk?

7. If the monster shuts four eyes, how many are left open?



9. Colour every second dog.




10. How many are coloured?

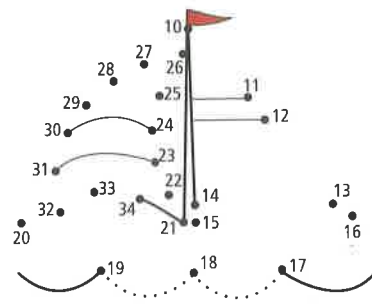
WEDNESDAY



2. Colour the coin that can buy more.




3. Join the dots. (Start at 10!)



The picture is a _____

4. If today is Wednesday, what will tomorrow be?

5. $4 + 6 =$ _____



7. Is 12 before or after 11?

8. How many eyes are shut?

9. How many are open?



10. How many eyes altogether? _____

MONDAY

1. Join the dots.

Which shape did you draw?

- circle
- square
- triangle

2. $10 + 2 =$ _____



_____ + _____ + _____ = _____



_____ o'clock

5. Show a tally of 8. _____

6. How many more to make 4 fish? _____



7. Will this bike roll?

- yes
- no



8. If it's Monday, what day was yesterday?

9. Tick the coins to make 10c.




10. $5 +$ _____ $=$

TUESDAY

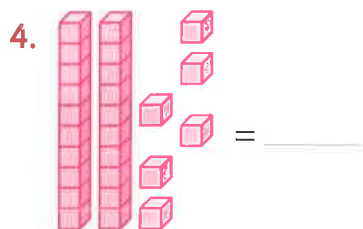


2. Colour the right arrow.



3. Will a and a stack evenly?

yes no



5. Fill in the missing number.

27	28	29	30
	38	39	40

6. (a) Tick the coins to make 20c.



(b) How much money is not shaded? _____

7. + _____ =

8. Draw a straight line from A to B.



9. Draw a curved line from A to B.



10. Hungry Harry ate half a pizza for 8 days in a row. How many whole pizzas is that?

WEDNESDAY

1. Order these numbers from lowest to highest:

84 79 86 71 57



2. (a) Match the halves.



A and _____, _____

and _____.

(b) Which half doesn't match? _____

3. Complete the pattern.



4. $8 +$ _____ $= 10$

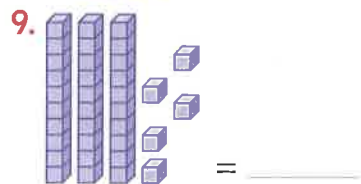
5. (a) Tick the coins to make 15c.



(b) How much money is left? _____ c

6. + + _____ = 15c

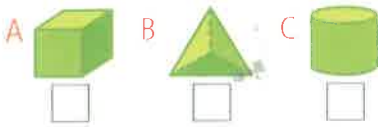
7. $10 + 4 =$ _____



10. Is 19 before or after 20?

MONDAY


1. Tick the object that can roll smoothly.



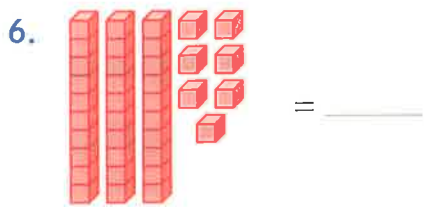
2. + = _____ c



4. Tick the longest lizard.



5. $10 + 7 =$ _____



7. Fill in the missing numbers.

Making 10	0 + 10 = 10		
	(a)	1 +	= 10
	(b)	2 +	= 10
	(c)	3 +	= 10
	(d)	4 +	= 10
	(e)	5 +	= 10

8. (a) $20 + 3 =$ _____

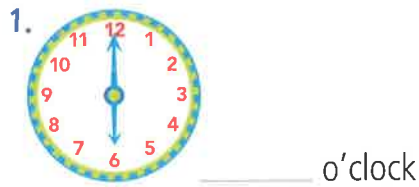
(b) $30 +$ _____ = 34

(c) _____ + 5 = 45

9. $10 - 1 =$ _____

10. 10, 20, 30, 40, 50, _____

TUESDAY



2. (a) $50 +$ _____ = 56

(b) _____ + 7 = 77

(c) _____ + 2 = 22

3. Write the date of your birthday.

4. Is 23 before or after 22?

5. $10 + 8 =$ _____

6. Example: $5 - 2 = ?$

Circle 5, count back 2 = 3, so $5 - 2 = 3$



Circle 6, count back 4.



$6 - 4 =$ _____

7. Colour the penguin on the left.



8. What can you do in a minute?

run around the class

eat a banana

walk around a basketball court

or _____

9. 24, 26, 28, _____, _____

10. $40 + 3 =$ _____

WEDNESDAY

1. Colour half of this battery.



2. $10 + 9 =$ _____

3. E matches with _____.



4. How many more to make 4 fish?



5. Fill in the missing numbers.

43	44	45	
53		55	56

6. (a) $7 +$ _____ = 10

(b) $20 + 8 =$ _____

7. Write a number sentence.



Circle 3, count on 4, so

_____ + _____ = _____

8. $6 + 6 =$ _____

9. $20 - 5 =$ _____

10. (a) _____ + 9 = 89

(b) $20 + 0 =$ _____

(c) _____ + 0 = 40

YOUR SCORE



THURSDAY

1. (a) $4 + \underline{\hspace{1cm}} = 10$

(b) $\underline{\hspace{1cm}} + 3 = 10$

(c) $1 + \underline{\hspace{1cm}} = 10$

(d) $2 + \underline{\hspace{1cm}} = 10$



$\underline{\hspace{1cm}}$ o'clock

3. Order the months.

March	3	April	August	December	February	July	October
-------	---	-------	--------	----------	----------	------	---------

4. $11 - 1 = \underline{\hspace{1cm}}$

5. $10 + 10 = \underline{\hspace{1cm}}$

6. $20 - 10 = \underline{\hspace{1cm}}$

7. $\underline{\hspace{1cm}}, 38, 36, 34, 32$

8. $1, 3, 5, 7, 9, \underline{\hspace{1cm}}$

9. $300, 400, \underline{\hspace{1cm}}, 600$

10. Add coins to make 30c.



Monday

Olivia was given this bank note as change from \$20. What did she spend?



Tuesday

6 spoonfuls of porridge are shared equally among the 3 bowls. How many spoonfuls are in each bowl?



Wednesday

Lily's birthday is in May. Riley's birthday was 2 months before Lily's. What month is Riley's birthday in?



Thursday

A school bus has seats for 20 children. Luke counted 3 empty seats. How many children were on the bus?



YOUR SCORE



PROBLEM-SOLVING

1. Add a coin to make 20c.



2. 500, 600, $\underline{\hspace{1cm}}, 800$

3. $20 + 4 = \underline{\hspace{1cm}}$

4. $1 + \underline{\hspace{1cm}} = 10$

5. (a) $\underline{\hspace{1cm}} + 2 = 12$

(b) $30 + \underline{\hspace{1cm}} = 35$

(c) $40 + \underline{\hspace{1cm}} = 49$

6. 2, 4, 6, 8, 10, 12, $\underline{\hspace{1cm}}$

7. Finish the pattern.



8. Colour half of the lollipops.



9. Order these numbers from lowest to highest.

45 31 72 99 50



$\underline{\hspace{1cm}}$ o'clock

11. May, $\underline{\hspace{1cm}},$ July


12. Which box is heavier?



FRIDAY REVIEW

MONDAY

1. Join the dots.



2. $10 + 4 =$ _____

3. _____ o'clock

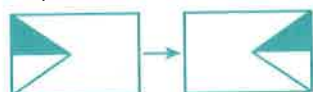
4. Tick the longest ruler.



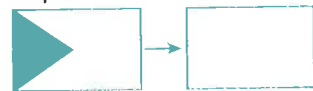
5. Write *twenty-four* as a numeral. _____

6. (a) _____ + 3 = 13
 (b) $20 +$ _____ = 29
 (c) $6 +$ _____ = 36

7. Flip.



Flip and draw.



8. How many more to make 6 fish?



3	M	7
Z	Y	K
4	G	5

9. The top left is _____.

10. The bottom right is _____.

TUESDAY

1. _____ o'clock

2. Circle the shape with 3 corners.



3. Tick the shortest ruler.



4. Fill in the missing number.

35	36	37	38	39
45	46	47		49

5. Add coins to make 30c.



6. 500, 600, 700, _____

7. Order these months from 1–3.

March	January	February

8. Write a number sentence.



Circle 6, go back 4.

_____ - _____ = _____

9. Colour the sail on the right.



10. (a) _____ + 3 = 73

(b) $60 +$ _____ = 68


(c) _____ + _____ = 42

WEDNESDAY

1. Circle the shapes with 4 corners.



2. Tick the longest ruler.



3. 500, 400, _____, 200



The difference in price is:

- \$200
 \$2
 20c

5. $6 +$ _____ = 10

6. 1, 3, 5, 7, _____, _____

7. How many more fish to make 9?



8. (a) $10 - 2 =$ _____

(b) $20 - 2 =$ _____

9. Is 29 before or after 30?

10. _____ o'clock

YOUR SCORE



10. Add coins to make 40c.

9. The year is _____ + _____ = _____

Circle 3, count on 4, so



8. Write the number sentence.



7. Add coins to make 15c.

6. How many more to make 10 fish?



5. 1, 4, 7, 10, _____

4. $10 - 3 =$ _____

R	4	W
6	9	2
T	7	K

3. Colour the new position.

From W
go up
2 spots,
turn left
1 spot.

2. _____ o'clock



1. $3 +$ _____ = 10

THURSDAY

YOUR SCORE



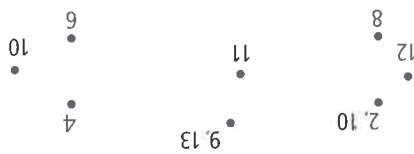
How many more cups to fill the jug to 10 cups?

Thursday



A bowl had 10 bananas. Later there were 4 bananas. How many bananas were taken?

Wednesday



Find the right number pattern to make a rectangle.

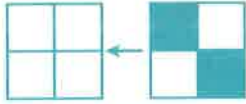
Tuesday

5	6	4
7	1	3


Colour 3 numbers to make 10.

Monday

YOUR SCORE



12. Flip and draw.



11. Tick the same-sized rulers.

_____ o'clock



10. _____

9. 500, _____, 300, 200, 100

8. $80 +$ _____ = 85

Take 2 dots away = _____



6. 3, 6, 9, _____, 15, _____

(b) $12 + 8 =$ _____

(a) $2 + 8 =$ _____

4. 18, 16, _____, 12, 10, _____

3. Is 89 before or after 90?

2. 60, 80, _____, 120

1. $10 - 4 =$ _____

FRIDAY REVIEW

PROBLEM-SOLVING

MONDAY

1. Which pairs of shapes match?



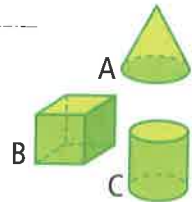
_____ and _____, _____ and _____

2. Label each object.

cylinder _____

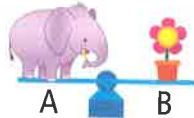
cone _____

cube _____



_____ o'clock

4. Will the seesaw land on A or B?



5. Sort into 2 groups. Colour the large objects green and the small objects red.



6. $5 + 1 = 6$, so $6 - 1 = 5$

$2 + 3 = 5$, so $5 - \square = 2$

7. $10 + 2 = \underline{\hspace{2cm}}$

8. Write a number sentence.



Circle 3, count on 4, so

_____ + _____ = _____

9. How many pizza halves? _____



10. How many whole pizzas do the halves make? _____

TUESDAY



_____ o'clock

2. 600, 700, _____, 900

3. Tally 9. _____

4. Sort into 2 groups. Colour the heavy objects blue and the light objects red.



5. Write a number sentence.



Circle 2, count on 8, so

_____ + _____ = _____

6. Will this seesaw land on A or B?



Share these cakes between two of your friends. How many each?

8. $4 + 2 = 6$, so

$6 - \square = 2$

9. How many pizza halves?



10. How many whole pizzas do the halves make?

WEDNESDAY

1. How many triangles are there?



2. What month is your birthday?

3. Sort into 2 groups. Objects that:

- need water—blue
- don't need water—red.



4. Order these months from 1–3.

February	March	January

5. $10 + 10 = \underline{\hspace{2cm}}$

6. Write *twenty-two* as a numeral. _____


7. Share these ice creams between you and your teacher.



How many each? _____

8. 70, 80, 90, _____

9. $10 + 10 + 10 = \underline{\hspace{2cm}}$



_____ o'clock

YOUR SCORE



YOUR SCORE



YOUR SCORE



YOUR SCORE



THURSDAY

- $10 + 5 =$
- $5 + 5 + 5 =$
-
- o'clock or :00
- Colour the new position.
- From turn right 1 spot and go up 2 spots.
- $4 + 6 = 10$, so $10 - 4 =$
-
- Write a number sentence.

Circle 4, count on 6, so
- Add 10c coins to make \$1.
- Flip and draw.

YOUR SCORE



PROBLEM-SOLVING

- The 2D shape is a square. It measures
- cm by cm.
-
- $10 + 7 =$
 - $10 + 10 + 10 + 10 =$
 - Share between two worms!
- How many each?
- $8 + 2 = 10$
 - $10 - 2 =$
- Write a number sentence.
- Circle 3, count on 4, so
- $20 - 1 =$
- $10, 12, 16, 18,$
- $9 + 1 =$
- Fill the ten frame. How many dots were missing?
-
- o'clock or :00
- Start at . Go right 2 squares, down 2 squares and left 2 squares. Circle the new position.
- Tally 14.

Monday

Tuesday

Wednesday

Thursday

Which jar is certain to have a red marble chosen?

A B C

Which jar is more likely to have a blue marble chosen?

A B C

YOUR SCORE



FRIDAY REVIEW

- $10 + 7 =$
 - $10 + 10 + 10 + 10 =$
 - Share between two worms!
 - How many each?
 - $8 + 2 = 10$
 - $10 - 2 =$
- Write a number sentence.
- Circle 3, count on 4, so
- $20 - 1 =$
- $10, 12, 16, 18,$
- $9 + 1 =$
- Fill the ten frame. How many dots were missing?
-
- o'clock or :00
- Start at . Go right 2 squares, down 2 squares and left 2 squares. Circle the new position.
- Tally 14.


MONDAY

1. Will this door open out to the left or right?

- left
 right



2. $8 + \underline{\quad} = 10$

3.  o'clock
or $\underline{\quad} :00$

4. $100 - 1 = \underline{\quad}$

5. 100, $\underline{\quad}$, $\underline{\quad}$, 130

6. How many pairs of sunglasses will Mr Monster need?



7. Write a number sentence.



Circle 3, count on 5, so

$\underline{\quad} + \underline{\quad} = \underline{\quad}$

8. Fill the ten frame. How many dots were missing?




9. Fill in the missing number.

	71		73		75
80		82			

10. $7 + 7 = \underline{\quad}$

TUESDAY

1.  o'clock
or $\underline{\quad} :00$

2. $6 + 7 = \underline{\quad}$

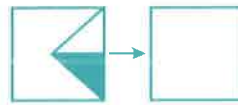
3. Will this door open out to the left or right?

- left
 right



4. $50 - 1 = \underline{\quad}$

5. Flip and draw.



6. (a) $90 + \underline{\quad} = 92$

(b) $\underline{\quad} + \underline{\quad} = 37$

7. Fill the ten frame. How many dots were missing?



8. Order these months from 1–3.

September	October	November

9. 

Circle 8, count back 4

$= \underline{\quad}$, so

$8 - \underline{\quad} = \underline{\quad}$

10. Write *thirty* as a numeral.


$\underline{\quad}$

WEDNESDAY

1. This sliding door will open if you slide it to the:

- left.
 right.



2.  This is: 41 14 5

3. $10 + 4 = \underline{\quad}$

4. $3 + 7 = 10$, so
 $10 - 3 = \underline{\quad}$

5. How many pairs of sunglasses will Mr Monster need?



6. Big Fish chased 3 fish yesterday and 4 fish today. How many fish did Big Fish chase? Write the number sentence.

$\underline{\quad} + \underline{\quad} = \underline{\quad}$

7. Colour the new position.

From , go down

1 spot, turn right 1 spot and go up 2 spots.



8. Add 10c coins to make 50c.



9. Colour half of the water tank.

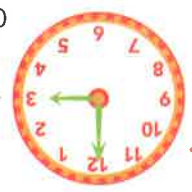


10.  Half past $\underline{\quad}$
or $\underline{\quad} :30$

YOUR SCORE




- This sliding door will open if you slide it to the:
 - left.
 - right.

2.  of clock _____ or _____:00

- $8 + 6 =$ _____
- Order these months from 1-3.

October	December	November
---------	----------	----------

- $100 +$ _____ $+ 3 = 123$
- 60, 55, _____, 45, 40
- Add 5c coins to make 70c.
 


- (a) $10 - 4 =$ _____
(b) $10 - 6 =$ _____
- Colour the largest number.
 - (107)
 - (129)
 - (180)
 - (169)

- 21, 24, 27, _____, 33

THURSDAY

YOUR SCORE





- Bronte was given this note as change from a \$50 note. What did she spend?
 

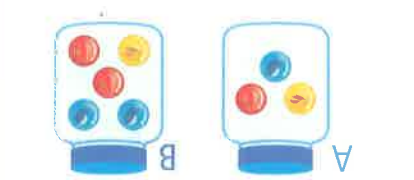
- Tuesday
 - Which book has pages 202 and 203?
 - A 
 - B 
 - C 

- Wednesday
 - Find the right number pattern to make a square.

12	•	19	•	3, 15	•	40, 60
•	9	•	6	•	45	•
55	•	17	•	17	•	18
•	50	•	18	•	45	•

- Which jar is least likely to have a yellow marble chosen?
 - A 
 - B 

Thursday





PROBLEM-SOLVING

FRIDAY REVIEW



- 40, 39, 38, _____, 36

- Colour any coins to make 30c.
 

- 19, 22, 25, _____, 31
- 65, 70, 75, _____, _____, 90

- $30 - 1 =$ _____
- Bronte has \$2. Which book can she buy?
 - A 
 - B 

- Share between 2 children.
 

- each _____
 - 
 - 

- Circle 8, count back 3, so _____

- $8 -$ _____ $=$ _____
- $101 - 1 =$ _____

- Half past _____ or _____:30

- What is the chance of you eating ice cream today?
 - likely
 - unlikely

YOUR SCORE



Half past _____ or _____:30

Circle 8, count back 3, so _____

_____ 23 _____ 32 _____ 5 _____ 24



each _____

Share between 2 children.



can she buy?

Bronte has \$2. Which book

$30 - 1 =$ _____

_____ , 90

65, 70, 75, _____ , _____

19, 22, 25, _____ , 31



Colour any coins to make 30c.


40, 39, 38, _____ , 36

FRIDAY REVIEW

MONDAY

- $\triangle \square \square \triangle \square \square$ _____
- Which number is closer to 20?
 16 13 18
- 0 1 2 3 4 5 6 7 8 9 10 11
 Circle 10, count back 4.
 Write the number sentence.
 _____ - _____ = _____

4. $5 + 6 =$ _____

5.  Quarter past

 or _____:15

- Which month is after March?
 May April
- Colour the new position.

From , go right 2 spots, down 2 spots, then left 2 spots.

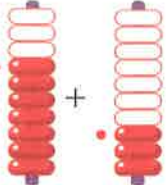


- Colour any coins to make 45c.



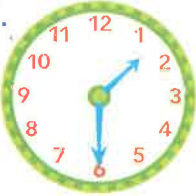
9. (a) _____ + 50 + 5 = 155

(b) _____ + _____ + 8 = 228

10.  + _____ = _____

YOUR SCORE 


TUESDAY

1.  Half past

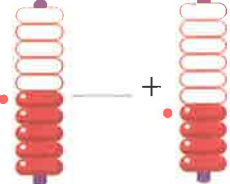
 or _____:30

2. Colour the penguin on the left.



- Tick the shortest gecko.




4. $10 + 6 =$ _____

5.  + _____ = 9

- Colour the new position.

From , go right 2 spots, up 2 spots and then left 2 spots.




- Share equally between yourself and a friend.


_____ each

8. $38 = 30 + 8$, so

$72 =$ _____ + _____

- Estimate the number of hands that can cover your desk.


10. $6 + 5 =$ _____

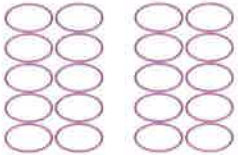
YOUR SCORE 

WEDNESDAY

- Write *thirteen* as a numeral. _____
- Which month is after July?
 August June

3. $8 + 3 =$ _____

4. $11 + 3 = 8$, so
 $11 - 8 =$ _____


5. Colour $2 + 8$.


_____ + _____ = _____

6. $43 = 40 + 3$, so

$85 =$ _____ + _____

- Colour the new position.

From , go right 2 spots, down 2 spots, then left 2 spots.



8. 50, 49, 48, 47, _____

- Colour the largest number.



- Fill the ten frame. How many dots were missing?



YOUR SCORE 

YOUR SCORE



1. $34 = 30 + 4$,

so $27 =$ _____ + _____

Which month is after June? July August

3. $10 + 3 =$ _____

4. $11 - 4 =$ _____

5. What is the chance of the wind blowing today? certain likely unlikely impossible

6. Colour the largest number.



7. (a) _____ + 3 = 13

(b) $20 +$ _____ = 29

(c) $6 +$ _____ = 36

8. How many more



to make 7 fish?

9. Write the number

sentence.



Circle 2, count on 8, so

_____ + _____ = _____

10. Add _____ coins to make \$1.50.



THURSDAY

YOUR SCORE



Monday



Alex took 4 weeks to do this painting.



Bronte took 8 days to paint hers.

Who took the longest for their painting?

Tuesday

The **Red** is heavier than the **Blue** and the **Black**.

Put in order.

lightest _____ heaviest

Wednesday

The **Red** is lighter than the **Green** and the **Blue**.

Put in order.

lightest _____ heaviest

Thursday

The **Black** is lighter than the **Red** and the **Green**.

Put in order.

lightest _____ heaviest

PROBLEM-SOLVING

FRIDAY REVIEW

Week 8

1. $3 + 7 =$ _____

2. $6 + 5 =$ _____

3. $80 - 1 =$ _____

4. $83 =$ _____ + _____

5. 800, 700, 600, _____

6. (a) $10 + 90 =$ _____

(b) $10 + 190 =$ _____

(c) $10 + 290 =$ _____

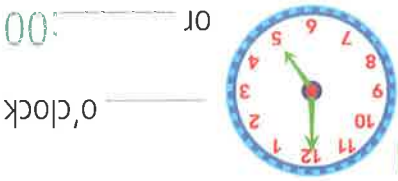
7. Which number is closest to 30?

21 28 26

8. Write *seventeen* as a numeral.

9. Which month is after August?

October September



_____ o'clock or _____:00

11. July is the _____ month of the year.

6th 7th

12. The **Blue** is lighter than the **Green** and the **Red**.

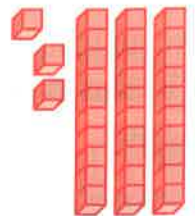
Put in order.

lightest _____ heaviest

YOUR SCORE



1. How many more to total 40?



2. Is this dot more than halfway?



yes no

3. Quarter past



or :15

4. 87, 97, _____, 127

5. $12 = 10 + 2$, so

$23 = \underline{\quad} + \underline{\quad}$

6. Colour the 2 numbers that total 10.



7. Toto the dog buried 9 bones in one spot and 6 bones in another.



How many bones did he bury? Write the number sentence.

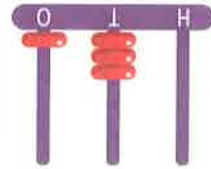
$\underline{\quad} + \underline{\quad} = \underline{\quad}$

8. $91 - 1 = \underline{\quad}$

9. How many groups of 2?

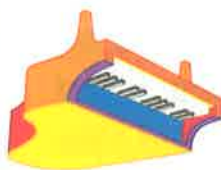


10. The abacus number is



Monday

Sarah played her piano 2 times each week. How many times had she played it after 3 weeks?



Tuesday

12 spoonfuls of porridge are shared equally among the 3 bowls. How many spoonfuls are in each bowl?



Wednesday

Apples cost 10c each. Alex spent 50c. How many apples did he buy?



Thursday

Room 7 had 16 boys. Room 8 had 5 more boys than Room 7. How many boys in Room 8?



1. $24 = \underline{\quad} + \underline{\quad}$

2. Is this dot about halfway or a quarter way?



half quarter

3. Colour the 2 numbers that total 10.



4. 40, 45, _____, 60

5. $12 - 9 = \underline{\quad}$

6. Which number is closest to 90?

80 85 93 86

7. 1, 3, 5, 7, 9, _____

1	4	9
Hundreds	Tens	Ones

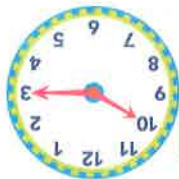
9. $149 = \underline{\quad} + \underline{\quad} + \underline{\quad}$



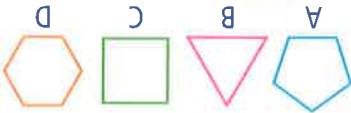
Quarter past

or

:15



11. Write in each shape the number of sides.



12. The _____ holds more than _____ and the _____ holds more than the _____.



Put in order.

holds less _____ holds more _____

YOUR SCORE

YOUR SCORE

YOUR SCORE

MONDAY

- Is and the same size and shape?
 yes no
- Tick the object you would use to measure your height.
- _____ o'clock
 or _____:00

- Write *thirty-four* as a numeral. _____
- Fill in the missing numbers.

30		32		34	35
	41		43	44	45

Hundreds	Tens	Ones
1	6	7

- 167 = _____ + _____ + _____
- Complete the ten frame. Finish this number sentence.
 $5 + \underline{\hspace{2cm}} = 10$

- What chance do you have of buying an ice cream today?
 likely unlikely
- How many pizza halves?

- Which number is closest to 40?
 36 44 37 48

YOUR SCORE

TUESDAY

- Half past _____
 or _____:30
- Is and the same size and shape?
 yes no
- Flip and draw.
- Adam rode his bike for 5 km, rested, then rode 6 km. How many kilometres did Adam ride altogether?
 Write as a number sentence.

_____ + _____ = _____

- Balance the seesaw.
- From , go left 1 spot, down 1 spot and right 2 spots. Circle the square.
- Add 10c coins to make 60c.



- What is the chance of your dad buying you a new bike today?
 likely unlikely
- Count _____
 How many groups of two?

- Write *twelve* as a numeral.

YOUR SCORE

WEDNESDAY


- Is 90 before or after 91?
 before after
- What is the chance of you eating spaghetti for lunch today?
 likely unlikely
- Which number is closest to 150?
 151 148
 157 147
- Colour 2 numbers that total 10.
- The holds more than the and the holds more than the . Put in order.
- Balance the seesaw.
- Draw a dot halfway between A and B.
- Match by writing the correct letter in the shape.
 A square
 B triangle
 C pentagon
- Quarter to _____
 or _____:45
- $4 + \underline{\hspace{2cm}} + 2 = 10$

YOUR SCORE


YOUR SCORE



10. Show 45 on the abacus.



9. How many groups of 2? halves? quarters?



8. Draw a line halfway between A and B, then B and C.

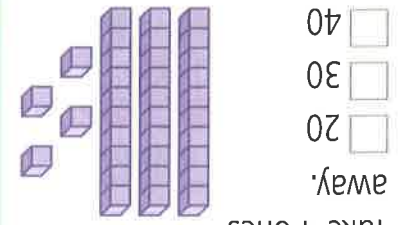


149 200 180

7. Order from lowest to highest.

$10 - 7 =$ _____

$10 - 3 =$ _____



5. Take 4 ones away.

- 40
- 30
- 20

4. 5, 8, 11, _____, _____

3. $9 + 4 =$ _____

2. What number is between 108 and 110? _____

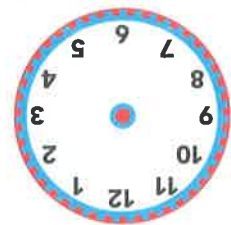
Quarter to _____:45 or _____



1. Quarter to _____

THURSDAY

YOUR SCORE



The time is 11 am. Draw the time after 6 lots of 5 minutes.

Thursday

- 3D shape
- Rolls
- 2 flat surfaces
- 1 curved surface

What am I?

Wednesday

A school bus has seats for 20 children. Luke counted 3 empty seats. How many children were on the bus?



Tuesday

Mia's birthday is in April. Eva's birthday is 3 months after Mia's. What month is Eva's birthday in?



Monday

YOUR SCORE



likely unlikely



What is the chance of you going to the beach today?

pentagon hexagon



$9 + 2 =$ _____

Colour 2 numbers that add to 10.

9. 7 2 3 4 5



8. Colour any coins to make 40c.

How many lots of 3?



7. Count _____.

6. $10 - 8 =$ _____

5. $100 - 2 =$ _____

4. 4, 7, 10, _____, 16

3. Which number is closest to 300?

- 278
- 174
- 268
- 160

2. 110, _____, 107

1. $43 =$ _____ + _____

FRIDAY REVIEW

PROBLEM-SOLVING